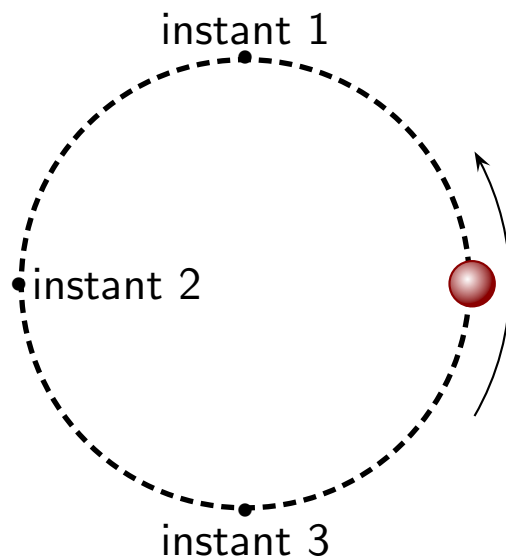


Question 1

A ball travels on a horizontal surface in a circle at a constant speed.

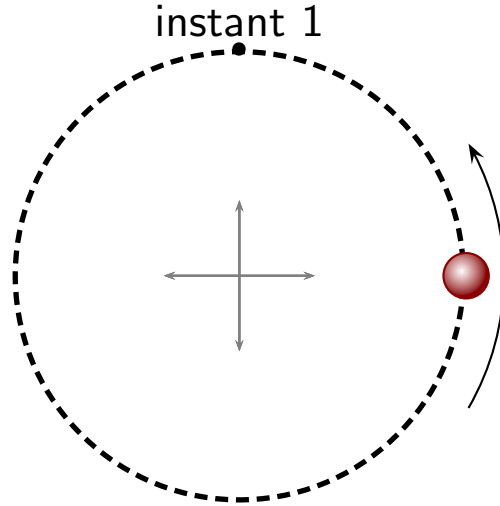


Which of the following is true?

1. The velocity of the ball is the same at all three instants.
2. The velocities of the ball at instants 1 and 3 are the same but different from instant 2.
3. The velocities of the ball at all three instants are different.

Question 2

A ball travels on a horizontal surface in a circle at a constant speed.

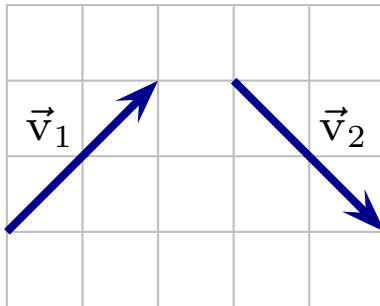


Using a coordinate system with origin at the center of the circle, which of the following is true of the velocity at instant 1?

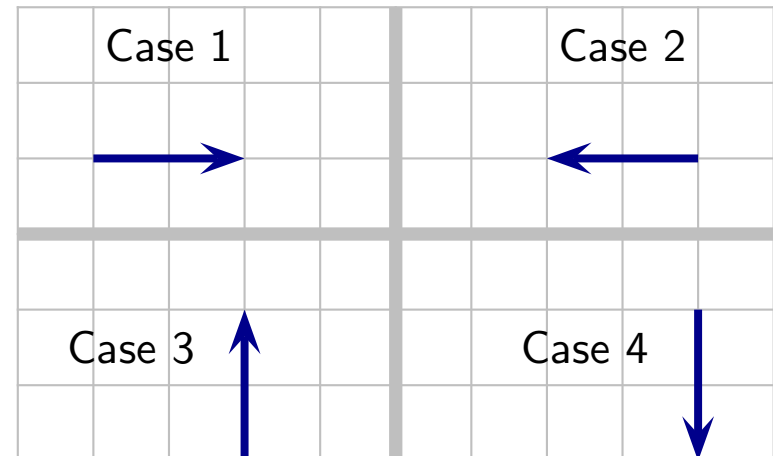
1. $v_x = 0$ and $v_y = 0$.
2. $v_x = 0$ and $v_y > 0$.
3. $v_x < 0$ and $v_y = 0$.
4. $v_x < 0$ and $v_y > 0$.
5. $v_x > 0$ and $v_y = 0$.

Question 3

Consider a particle whose velocity vectors at two moments 2.0 s apart are as illustrated.

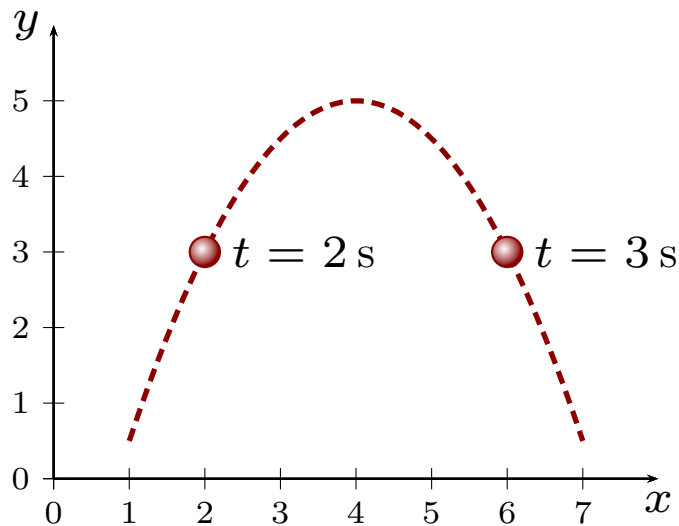


Which of the following best represents the average acceleration during this period?



Question 4

A projectile moves along the indicated trajectory.



Which of the following is true regarding the average acceleration between the two instants?

1. Acceleration is zero.
2. \vec{a}_{avg} has direction \leftarrow .
3. \vec{a}_{avg} has direction \rightarrow .
4. \vec{a}_{avg} has direction \downarrow .
5. \vec{a}_{avg} has direction \searrow .